


I am finding dominoes that have an **even** number of spots.
Which dominoes don't belong?




Name/s: _____

MATHS
QUEST

1

I am finding dominoes that have **fewer than 8** spots.
Which dominoes don't belong?

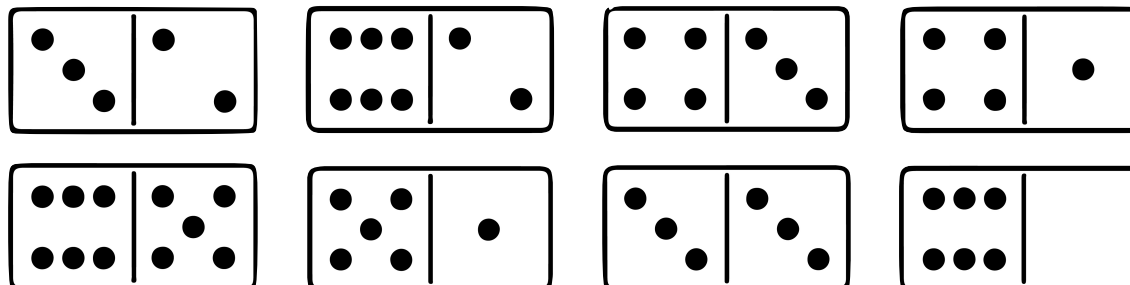


Name/s: _____

MATHS
QUEST

2

I am finding dominoes that have **between 5 and 9** spots.
Which dominoes don't belong?




Name/s: _____

MATHS
QUEST



I am finding dominoes that have **between 4 and 8** spots.
Which dominoes don't belong?



Name/s: _____

MATHS
QUEST



Look at the number of spots on a set of dominoes.

You might **not** need all the frames.

How many dominoes have a total of **4** spots?

Name/s: _____

MATHS
QUEST

6

Look at the number of spots on a set of dominoes.

You might **not** need all the frames.

How many dominoes have a total of **6** spots?

?	?
---	---

Name/s: _____

MATHS
QUEST

7